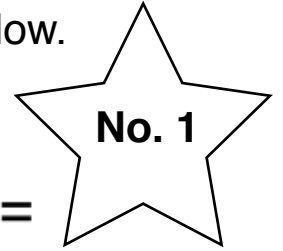


Name: \_\_\_\_\_

# Adding up rhythm!

Work out the total of number of beats in the **rhythms** below.  
*The first one has been done for you.*



+ = 2

+ =

+ =

+ =

+ =

+ =

+ =

+ =

+ =

+ =

+ =

+ =

+ =

+ =

+ =

+ =

+ =

+ =

+ =

+ =

+ =

+ =

+ =

+ =

+ =

+ =

+ =

+ =

+ =

+ =

Score: \_\_\_\_\_ of 10

Score: \_\_\_\_\_ of 10

Score: \_\_\_\_\_ of 10

Bonus Question:

+ + + + + + + + + + =

**Task 2:** Now have a go at writing your own “add up” rhythms below!

1. \_\_\_\_\_ + \_\_\_\_\_ =

5. \_\_\_\_\_ + \_\_\_\_\_ =

2. \_\_\_\_\_ + \_\_\_\_\_ =

6. \_\_\_\_\_ + \_\_\_\_\_ =

3. \_\_\_\_\_ + \_\_\_\_\_ =

7. \_\_\_\_\_ + \_\_\_\_\_ =

4. \_\_\_\_\_ + \_\_\_\_\_ =

8. \_\_\_\_\_ + \_\_\_\_\_ =

Name: \_\_\_\_\_

# Adding up rhythm!



Work out the total of number of beats in the **rhythms** below.  
*The first one has been done for you.*

$$\text{♩} + \text{♩} = 2$$

$$\text{♩} + \text{♩} =$$

$$\text{♩} + \text{♩} =$$

$$\text{♩} + \text{♩} =$$

$$\text{♩} + \text{♩} =$$

$$\text{♩} + \text{♩} =$$

$$\text{♩} + \text{♩} =$$

$$\text{♩} + \text{♩} =$$

$$\text{♩} + \text{♩} =$$

$$\text{♩} + \text{♩} =$$

$$\text{♩} + \text{♩} =$$

$$\text{♩} + \text{♩} =$$

$$\text{♩} + \text{♩} =$$

$$\text{♩} + \text{♩} =$$

$$\text{♩} + \text{♩} =$$

$$\text{♩} + \text{♩} =$$

$$\text{♩} + \text{♩} =$$

$$\text{♩} + \text{♩} =$$

$$\text{♩} + \text{♩} =$$

$$\text{♩} + \text{♩} =$$

$$\text{♩} + \text{♩} =$$

$$\text{♩} + \text{♩} =$$

$$\text{♩} + \text{♩} =$$

$$\text{♩} + \text{♩} =$$

$$\text{♩} + \text{♩} =$$

$$\text{♩} + \text{♩} =$$

$$\text{♩} + \text{♩} =$$

$$\text{♩} + \text{♩} =$$

$$\text{♩} + \text{♩} =$$

$$\text{♩} + \text{♩} =$$

Score: \_\_\_\_\_ of 10

Score: \_\_\_\_\_ of 10

Score: \_\_\_\_\_ of 10

Bonus Question:

$$\text{♩} + \text{♩} + \text{♩} + \text{♩} + \text{♩} + \text{♩} + \text{♩} + \text{♩} + \text{♩} + \text{♩} + \text{♩} =$$

**Task 2:** Now have a go at writing your own “add up” rhythms below!

1. \_\_\_\_\_ + \_\_\_\_\_ =

5. \_\_\_\_\_ + \_\_\_\_\_ =

2. \_\_\_\_\_ + \_\_\_\_\_ =

6. \_\_\_\_\_ + \_\_\_\_\_ =

3. \_\_\_\_\_ + \_\_\_\_\_ =

7. \_\_\_\_\_ + \_\_\_\_\_ =

4. \_\_\_\_\_ + \_\_\_\_\_ =

8. \_\_\_\_\_ + \_\_\_\_\_ =

Name: \_\_\_\_\_

# Adding up rhythm!



Work out the total of number of beats in the **rhythms** below.  
*The first one has been done for you.*

$$\text{♩} + \text{♩} = 4$$

$$\text{♩} + \text{♩.} =$$

$$\text{♩} + \text{♩} =$$

$$\text{♩.} + \text{♩.} =$$

$$\text{♩} + \text{♩.} =$$

$$\text{♩} + \text{♩} =$$

$$\text{♩} + \text{♩.} =$$

$$\text{♩} + \text{♩} =$$

$$\text{♩} + \text{♩} =$$

$$\text{♩} + \text{♩} =$$

$$\text{♩} + \text{♩} =$$

$$\text{♩} + \text{♩.} =$$

$$\text{♩} + \text{♩} =$$

$$\text{♩} + \text{♩.} =$$

$$\text{♩} + \text{♩} =$$

$$\text{♩} + \text{♩.} =$$

$$\text{♩} + \text{♩} =$$

$$\text{♩.} + \text{♩.} =$$

$$\text{♩.} + \text{♩} =$$

$$\text{♩} + \text{♩} =$$

$$\text{♩} + \text{♩} =$$

$$\text{♩.} + \text{♩.} =$$

$$\text{♩} + \text{♩.} =$$

$$\text{♩} + \text{♩} =$$

$$\text{♩} + \text{♩.} =$$

$$\text{♩} + \text{♩} =$$

$$\text{♩} + \text{♩.} =$$

$$\text{♩} + \text{♩} =$$

$$\text{♩.} + \text{♩} =$$

$$\text{♩} + \text{♩} =$$

Score: \_\_\_\_\_ of 10

Score: \_\_\_\_\_ of 10

Score: \_\_\_\_\_ of 10

Bonus Question:

$$\text{♩} + \text{♩.} + \text{♩} + \text{♩.} + \text{♩.} + \text{♩} + \text{♩} + \text{♩.} + \text{♩} + \text{♩} + \text{♩.} =$$

**Task 2:** Now have a go at writing your own “add up” rhythms below!

1. \_\_\_\_\_ + \_\_\_\_\_ =

5. \_\_\_\_\_ + \_\_\_\_\_ =

2. \_\_\_\_\_ + \_\_\_\_\_ =

6. \_\_\_\_\_ + \_\_\_\_\_ =

3. \_\_\_\_\_ + \_\_\_\_\_ =

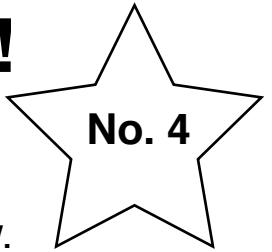
7. \_\_\_\_\_ + \_\_\_\_\_ =

4. \_\_\_\_\_ + \_\_\_\_\_ =

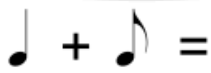
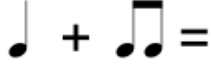
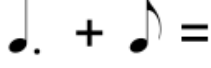
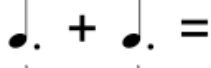
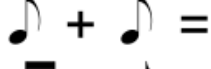
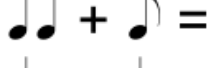
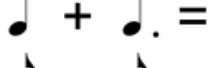



8. \_\_\_\_\_ + \_\_\_\_\_ =

Name: \_\_\_\_\_

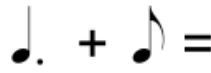
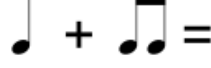
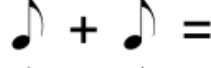
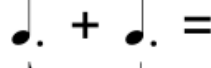
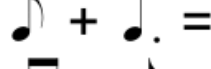
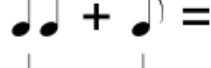
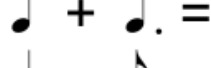



# Adding up rhythm!



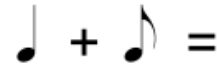
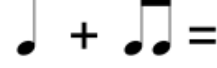
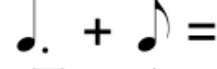
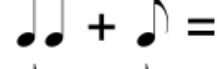
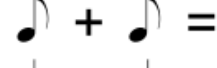
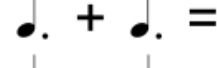
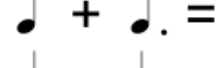
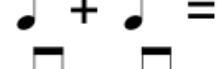


Work out the total of number of beats in the **rhythms** below.  
*The first one has been done for you.*

Score: \_\_\_\_\_ of 10

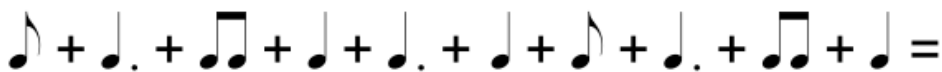
  
  
  
  
  
  
  
  
  


Score: \_\_\_\_\_ of 10

Score: \_\_\_\_\_ of 10

**Bonus Question:**



**Task 2:** Now have a go at writing your own “add up” rhythms below!

1. \_\_\_\_\_ + \_\_\_\_\_ =

5. \_\_\_\_\_ + \_\_\_\_\_ =

2. \_\_\_\_\_ + \_\_\_\_\_ =

6. \_\_\_\_\_ + \_\_\_\_\_ =

3. \_\_\_\_\_ + \_\_\_\_\_ =

7. \_\_\_\_\_ + \_\_\_\_\_ =

4. \_\_\_\_\_ + \_\_\_\_\_ =

8. \_\_\_\_\_ + \_\_\_\_\_ =

Name: \_\_\_\_\_

# Adding up rhythm!



Work out the total of number of beats in the **rhythms** below.  
*The first one has been done for you.*

$$\text{Quarter note} + \text{Quarter note} =$$

$$\text{Quarter note} + \text{Quarter note} =$$

$$\text{Quarter note} + \text{Quarter note} =$$

$$\text{Quarter note} + \text{Quarter note} =$$

$$\text{Quarter note} + \text{Quarter note} =$$

$$\text{Quarter note} + \text{Quarter note} =$$

$$\text{Quarter note} + \text{Quarter note} =$$

$$\text{Quarter note} + \text{Quarter note} =$$

$$\text{Quarter note} + \text{Quarter note} =$$

$$\text{Quarter note} + \text{Quarter note} =$$

$$\text{Quarter note} + \text{Quarter note} =$$

$$\text{Quarter note} + \text{Quarter note} =$$

$$\text{Quarter note} + \text{Quarter note} =$$

$$\text{Quarter note} + \text{Quarter note} =$$

$$\text{Quarter note} + \text{Quarter note} =$$

$$\text{Quarter note} + \text{Quarter note} =$$

$$\text{Quarter note} + \text{Quarter note} =$$

$$\text{Quarter note} + \text{Quarter note} =$$

$$\text{Quarter note} + \text{Quarter note} =$$

$$\text{Quarter note} + \text{Quarter note} =$$

$$\text{Quarter note} + \text{Quarter note} =$$

$$\text{Quarter note} + \text{Quarter note} =$$

$$\text{Quarter note} + \text{Quarter note} =$$

$$\text{Quarter note} + \text{Quarter note} =$$

$$\text{Quarter note} + \text{Quarter note} =$$

$$\text{Quarter note} + \text{Quarter note} =$$

$$\text{Quarter note} + \text{Quarter note} =$$

$$\text{Quarter note} + \text{Quarter note} =$$

$$\text{Quarter note} + \text{Quarter note} =$$

$$\text{Quarter note} + \text{Quarter note} =$$

Score: \_\_\_\_\_ of 10

Score: \_\_\_\_\_ of 10

Score: \_\_\_\_\_ of 10

Bonus Question:

$$\text{Quarter note} + \text{Quarter note} + \text{Quarter note} + \text{Quarter note} + \text{Quarter note} + \text{Quarter note} + \text{Quarter note} + \text{Quarter note} + \text{Quarter note} + \text{Quarter note} + \text{Quarter note} =$$

**Task 2:** Now have a go at writing your own “add up” rhythms below!

1. \_\_\_\_\_ + \_\_\_\_\_ =

5. \_\_\_\_\_ + \_\_\_\_\_ =

2. \_\_\_\_\_ + \_\_\_\_\_ =

6. \_\_\_\_\_ + \_\_\_\_\_ =

3. \_\_\_\_\_ + \_\_\_\_\_ =

7. \_\_\_\_\_ + \_\_\_\_\_ =

4. \_\_\_\_\_ + \_\_\_\_\_ =

8. \_\_\_\_\_ + \_\_\_\_\_ =